



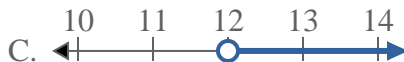
Solve each problem.

**Answers**

1) Which option best shows  $X > -5$



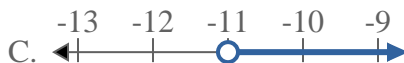
2) Which option best shows  $X \geq 12$



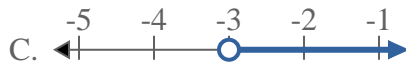
3) Which option best shows  $X \leq 20$



4) Which option best shows  $X \geq -11$



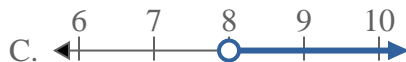
5) Which option best shows  $X > -3$



6) Which option best shows  $X > 5$



7) Which option best shows  $X \leq 8$



8) Which option best shows  $X \leq -13$



1. \_\_\_\_\_
2. \_\_\_\_\_
3. \_\_\_\_\_
4. \_\_\_\_\_
5. \_\_\_\_\_
6. \_\_\_\_\_
7. \_\_\_\_\_
8. \_\_\_\_\_



Solve each problem.

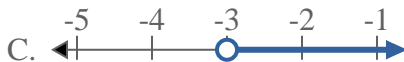
1) Which option best shows  $X > -5$



3) Which option best shows  $X \leq 20$




5) Which option best shows  $X > -3$



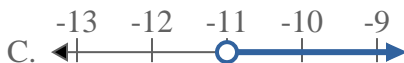
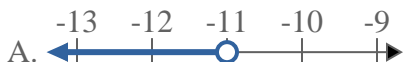
7) Which option best shows  $X \leq 8$



2) Which option best shows  $X \geq 12$



4) Which option best shows  $X \geq -11$



6) Which option best shows  $X > 5$



8) Which option best shows  $X \leq -13$



**Answers**

1.     **C**    

2.     **D**    

3.     **B**    

4.     **D**    

5.     **C**    

6.     **C**    

7.     **B**    

8.     **B**